

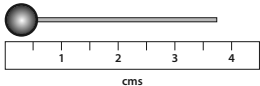


Spring Test 2

Name: _____ Class: _____ Date: _____

5-second questions

1				
2				
3		12		
4		63		
5		215		
6		362		
7				
8	3	65	653	635
9		19		
10	III	V	VII	X

10-second questions

11	cm	
12		
13		25
14		
15		51 46

Total marks	/15
-------------	-----

How well did you do?

Colour the numbers of the questions you got right.
Some questions may appear more than once.

Number, place value	4	7	8				
Addition and subtraction	1	5	6	15			
Multiplication and division	9	12	13				
Fractions	2	3					
Measurement	10	11	14				
Properties of shapes							
Position, direction							
Statistics							