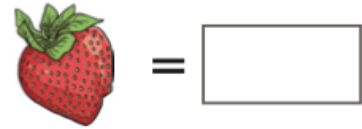
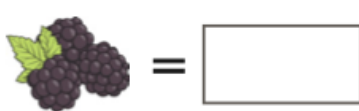
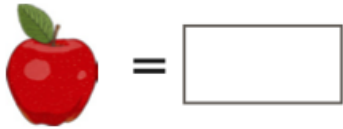
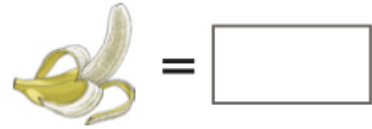
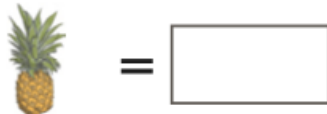


21.01.2021

OLI: To solve multiplication and division problems

1. Can you use your maths detective skills to work out which numbers these symbols represent?



2

×



=

10



×



=

20



×



=

16



×

3

=



÷

2

=



×



=



2. Which fruit can't you work out from these facts?

EXT:

Colour the correct number sentence boxes in green and the incorrect ones in red.

1. $4 \times 8 = 32$

2. $20 \div 5 = 5$

3. $12 \div 4 = 4$

4. $10 \times 5 = 50$



5. Four lots of four equal seventeen.

6. $25 \div 5 = 5$

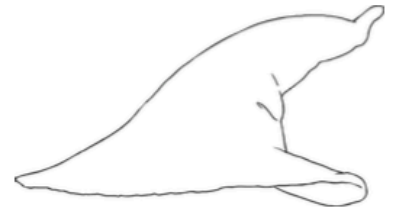
7. Eighty shared by ten equals 8.

8. Twenty four divided by four is six.

9. $6 \times 3 = 18$

10. $60 \div 5 = 10$

Challenge: Correct the answers that were wrong in coloured pen.



Working out space